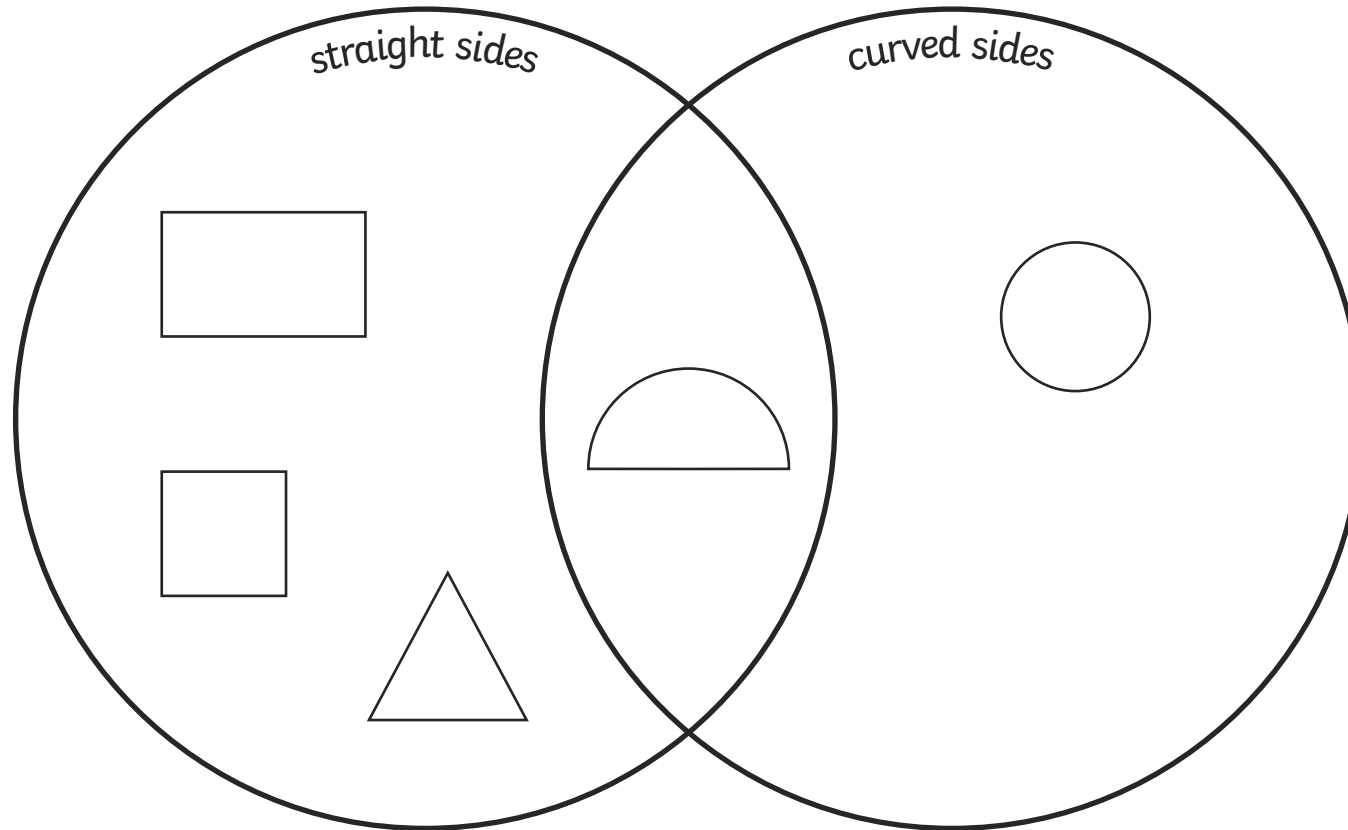


# Straight and Curved Sides **Answers**

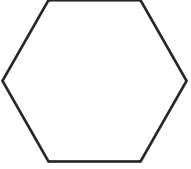
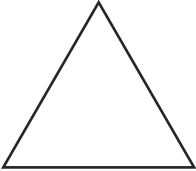



Draw the shapes in the correct spaces in the hoops.





# 2D Shapes: Properties Answers

Cut out the shapes and match them to the correct description.

	<p>6 straight sides 6 vertices This 2D shape is a <b>hexagon</b>.</p>
	<p>3 straight sides 3 vertices This 2D shape is a <b>triangle</b>.</p>
	<p>No straight sides No vertices This 2D shape is a <b>circle</b>.</p>
	<p>4 straight sides 4 vertices This 2D shape is a <b>rectangle</b>.</p>
	<p>4 straight sides all the same length 4 vertices This 2D shape is a <b>square</b>.</p>

# 2D Shape Properties Table Answers

2D Shape	Total Number of Sides	Number of Straight Sides	Number of Curved Sides	Number of Vertices
Square	4	4	0	4
Rectangle	4	4	0	4
Circle	1	0	1	0
Triangle	3	3	0	3
Pentagon	5	5	0	5
Hexagon	6	6	0	6

★★★

2D Shape	Total Number of Sides	Number of Straight Sides	Number of Curved Sides	Number of Vertices	Lines of Symmetry
Square	4	4	0	4	4
Rectangle	4	4	0	4	2
Circle	1	0	1	0	infinite
Triangle	3	3	0	3	3
Pentagon	5	5	0	5	5
Hexagon	6	6	0	6	6



2D Shape	Total Number of Sides	Number of Straight Sides	Number of Curved Sides	Number of Vertices
Square	4	4	0	4
Rectangle	4	4	0	4
Circle	1	0	1	0
Triangle	3	3	0	3
Pentagon	5	5	0	5
Hexagon	6	6	0	6