



Circles Answers


I can illustrate and name parts of circle and know that the diameter is twice the radius.



Radius = 10cm

Diameter = 20cm

Circumference = 62.8cm



Diameter = 22cm

Radius = 11cm


Circumference = 69.08cm



Radius = 15cm

Diameter = 30cm


Circumference = 94.2cm



Diameter = 36cm

Radius = 18cm

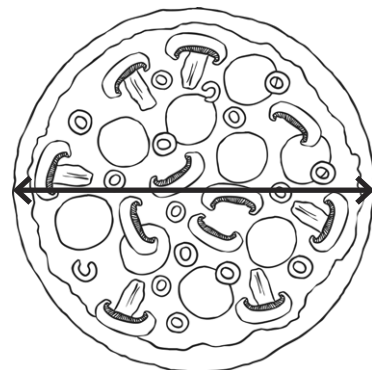
Circumference = 113.04cm



Radius = 17cm

Diameter = 34cm

Circumference = 106.76cm



Diameter = 48cm

Radius = 24cm

Circumference = 105.72cm