



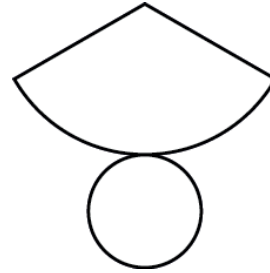
3D Shape Challenge

Can you unscramble the names of the 3D shapes and match them to the correct shape net?

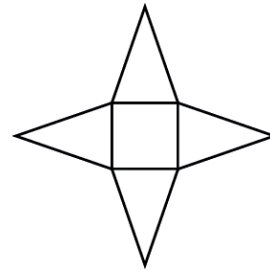
1. iyrneldC



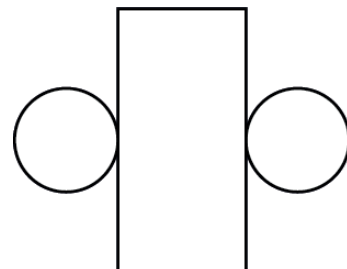
2. bueC



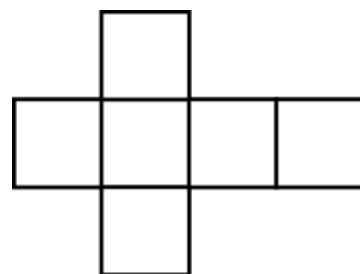
3. boCuid



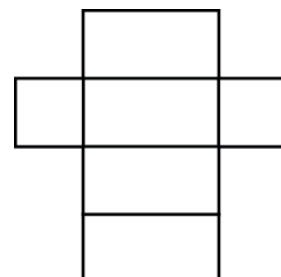
4. enoC



5. ymPrida



6. siPmr





3D Shape Challenge


Clues

Down

1. This shape has 6 rectangular faces. **(6)**
3. Where 2 faces meet. **(4)**
4. This shape has 8 triangular faces. **(10)**
5. This shape has 2 circular faces. **(8)**
6. The 2D surface of a 3D shape. **(4)**
8. A corner on a shape. **(6)**
10. A 3D shape where the cross section is the same all along its length. **(5)**

Across

2. This shape has 6 square faces. **(4)**
7. This shape has a square base and triangular sides. **(7)**
8. The word for more than one vertex. **(8)**
9. This shape has no vertices. **(6)**
11. This shape has 4 triangular faces. **(11)**
12. This shape has 1 circular face. **(4)**





3D Shape Challenge

Find examples of everyday objects which are common 3D shapes. Accurately draw and label the object and its shape net below.

3D Shape Name	Object	Shape Net
Cylinder	